

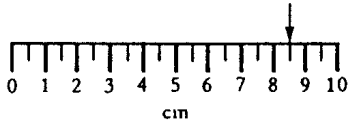
## INTERPRETING SCALES

Name: \_\_\_\_\_

Assessment Criteria: Read and interpret scales on a range of measuring instruments, explaining what each labelled division represents

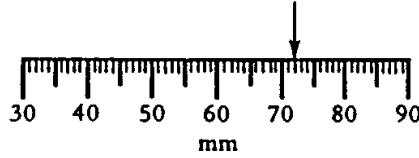
1. Write down the value represented by the arrow on each of these scales

a)



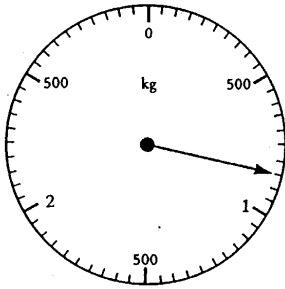
\_\_\_\_\_

b)



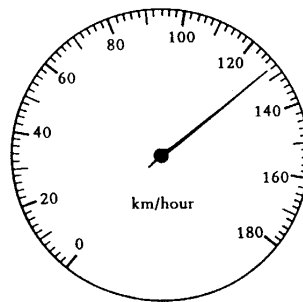
\_\_\_\_\_

c)



\_\_\_\_\_

d)



\_\_\_\_\_

2. Match each of these scales to the division into which it is split. Fill in the blank spaces to complete the matches.


0.5
0.01
10
—
2
25

Overall, I think my success level is:

Low      High

Q	INTERPRETING SCALES	☺	☹
	I can read a scale		
	I can interpret a scale		
	I can identify the labelled division on a scale		
	<i>I can identify and obtain necessary information to carry through a task and solve mathematical problems</i>		
I need to practise ...			